




- 2 Mr Khan's car cost £2,519  
Mrs Khan's car cost £3,200  
What is the difference between the cost of the two cars?



- 3  530 plus 1,470 equals 1,900

Use a subtraction to show that Jack is wrong.

- 4 Fill in the missing number on the bar model.



- 5 Complete the calculations.

$$10,700 + 4,810 = 9,700 + \boxed{\phantom{000}}$$

$$10,700 + 4,810 = 10,400 + \boxed{\phantom{000}}$$

